

Let's Play with Reasoning



Venn Diagram
(वेन आरेख)



By
Mohit Kawatra

Q1:-

Choose the best appropriate Venn Diagram for the following.

Vegetable, Potato, Cabbage

सब्जी, आलू, गोभी

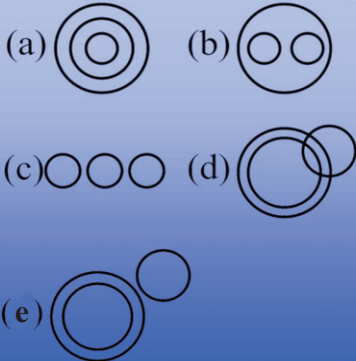


Q2:-

Choose the best appropriate Venn Diagram for the following

Table, Chair, Furniture

मेज, कुर्सी, फर्नीचर



Q3:-

Choose the best appropriate Venn Diagram for the following.

Week, Day, Year

सप्ताह, दिन, साल



Q4:-

Choose the best appropriate Venn Diagram for the following.

Judge, thief, Criminal

न्यायाधीश, चोर, अपराधी

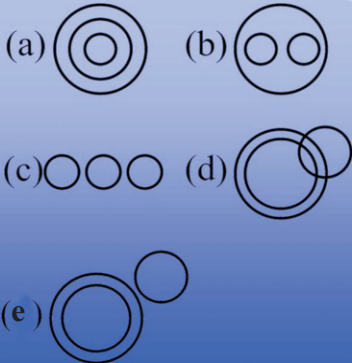


Q5:-

Choose the best appropriate Venn Diagram for the following.

Husband, Wife, Family

पति, पत्नी, परिवार



Q6:-

Choose the best appropriate Venn Diagram for the following.

Square, Rectangle Polygon

वर्ग, आयत, बहुभुज



Q7:-

Choose the best appropriate Venn Diagram for the following.

Bus, Car, Vehicle

बस, कार, वाहन



Q8:-

Choose the best appropriate Venn Diagram for the following.

Anxiety, Intelligence, Bathroom

चिंता, बुद्धि, स्नानघर



Q9:-

Choose the best appropriate Venn Diagram for the following.

House, Bedroom, Bathroom

घर, बिस्तर, स्नानगृह

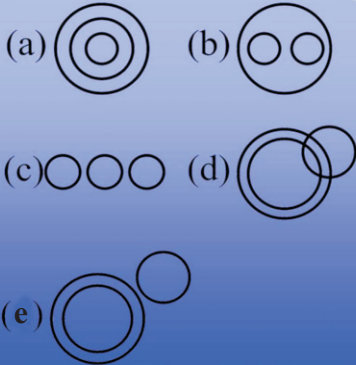


Q10:

Choose the best appropriate Venn Diagram for the following.

Mustard, Barley, Potato

सरसों, जौ, आलू



Q11:

Choose the best appropriate Venn Diagram for the following.

Elephants, Wolves, Animals

हाथी, भेड़ियें, जानवर



Q12:

Choose the best appropriate Venn Diagram for the following.

Metal, Iron, Chlorine

धातु, लोहा, क्लोरीन



Q13:

Choose the best appropriate Venn Diagram for the following.

Mammals, Cows, Crows

स्तनपायी, गाय, कौआ



Q14:

Choose the best appropriate Venn Diagram for the following.

Women, Mothers, Widows

औरत, माता, विधवा



Q15:

Choose the best appropriate Venn Diagram for the following.

Authors, Teachers, Men

लेखक, शिक्षक, आदमी



Q16:

Choose the best appropriate Venn Diagram for the following.

Kerala, Bihar, India

केरल, बिहार, भारत



Q17:

Choose the best appropriate Venn Diagram for the following.

Automobiles, Car, Motorcycles

वाहन, कार, मोटरसाइकिल



Q18:

Choose the best appropriate Venn Diagram for the following.

Brick, House, Bridge

ईंट, घर, पुल



Q19:

Choose the best appropriate Venn Diagram for the following.

Tea, Coffee, Beverages

चाय, काफी, पेय पदार्थ



Q20:

Choose the best appropriate Venn Diagram for the following.

Boys, Students, Atheletes

लड़के, छात्र, एथलीट



Q21:

Choose the best appropriate Venn Diagram for the following.

Tennis fans, Cricket Players, Students

टेनिस प्रशंसक, क्रिकेट खिलाड़ी, छात्र



Q22:

Choose the best appropriate Venn Diagram for the following.

Flowers, Clothes, White

फूल, कपड़ा, सफेद



Q23:

Choose the best appropriate Venn Diagram for the following.

Smokers, Lawyers, Non-smokes

धूम्रपान करने वाला, वकील, धूम्रपान नहीं करने वाला



Q24:

Choose the best appropriate Venn Diagram for the following.

Human beings, Teachers, Graduates

इंसानियत, शिक्षक, स्नातक



Q25:

Choose the best appropriate Venn Diagram for the following.

Males, Fathers, Doctors

पुरुष, पिता, डॉक्टर



Q26:

Choose the best appropriate Venn Diagram for the following.

Fathers, Uncles, Men

पिता, चाचा, आदमी



Q27:

Choose the best appropriate Venn Diagram for the following.

Musicians, Men, Women

संगीतकार, आदमी, औरत



Q28:

Choose the best appropriate Venn Diagram for the following.

Whales, Fishes, Crocodiles

व्हेल, मछली, मगरमच्छ



Q29:

Choose the best appropriate Venn Diagram for the following.

Anti-social elements, Pick-pockets, Blackmailers

असमाजिक तत्व, जेबकतरा, ब्लैक मेल करने वाला



Q30:

Choose the best appropriate Venn Diagram for the following.

Tall men, Black haired people, Indians

लम्बे आदमी, काले बाल वाले लोग, भारतीय

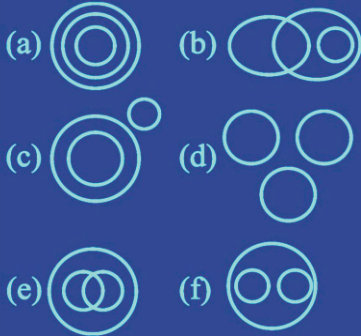


Q31:

Choose the best appropriate Venn Diagram for the following.

Apple, Golden apples, Fruits

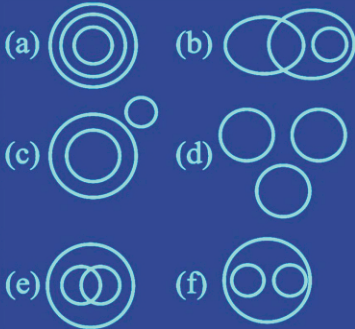
सेब, सुनहला सेब, फल



Q32:

Choose the best appropriate Venn Diagram for the following.

Triangles, Scalene triangles, Right-angled triangles/ त्रिभुज, विषमबाहु त्रिभुज, समकोण त्रिभुज



Q33:

Choose the best appropriate Venn Diagram for the following.

Star, Moon, Sun

तारा, चन्द्रमा, सूर्य



Q34:

Choose the best appropriate Venn Diagram for the following.

Teacher, College, Student

शिक्षक, कॉलेज, छात्र



Q35:

Choose the best appropriate Venn Diagram for the following.

Mother, Homosapien, Woman

माता, मनुष्य, औरत



Q36:

Choose the best appropriate Venn Diagram for the following.

Iron, Lead, Nitrogen

लोहा, शीशा, नाइट्रोजन



Q37:

Choose the best appropriate Venn Diagram for the following.

Cabinet, Home Minister, Minister

मंत्रिमंडल, गृहमंत्री, मंत्री



Q38:

Choose the best appropriate Venn Diagram for the following.

Parrots, Birds, Mice

तोता, पक्षी, चूहे



Q39:

Choose the best appropriate Venn Diagram for the following.

Professor, Birds, Mice

प्रोफेसर, चिड़िया, चूहें



Q40:

Choose the best appropriate Venn Diagram for the following.

Men, Rodents, Living beings

आदमी, कतरने वाले जानवर, सजीव



Reasoning with Mohit Kawatra

Answer-Key

1. (B)	11. (C)	21. (C)	31. (A)
2. (B)	12. (B)	22. (A)	32. (F)
3. (A)	13. (B)	23. (A)	33. (C)
4. (E)	14. (D)	24. (E)	34. (C)
5. (B)	15. (A)	25. (D)	35. (B)
6. (A)	16. (C)	26. (E)	36. (E)
7. (B)	17. (C)	27. (A)	37. (B)
8. (C)	18. (E)	28. (B)	38. (D)
9. (B)	19. (C)	29. (E)	39. (E)
10. (C)	20. (A)	30. (C)	40. (C)

